

ESCOLA: \_\_\_\_\_




















NOME: \_\_\_\_\_

PROFESSOR: \_\_\_\_\_ DATA: \_\_\_ / \_\_\_ / \_\_\_



# QUANTIDADE

1 - CONTE E ESCREVA A QUANTIDADE DE VEZES QUE CADA CACHORRO APARECE.






ESCOLA: \_\_\_\_\_

NOME: \_\_\_\_\_

PROFESSOR: \_\_\_\_\_ DATA: \_\_\_/\_\_\_/\_\_\_

# QUANTIDADE

1 - CONTE E ESCREVA A QUANTIDADE DE VEZES QUE CADA CACHORRO APARECE.



7



14



11



8

|  |  |  |  |  |  |  |  |
|--|--|--|--|--|--|--|--|
|  |  |  |  |  |  |  |  |
|  |  |  |  |  |  |  |  |
|  |  |  |  |  |  |  |  |
|  |  |  |  |  |  |  |  |
|  |  |  |  |  |  |  |  |